


Sidewalk Stones

In Prague some sidewalks are made of small square blocks of stone.


The blocks are in different shades to make patterns that are in various sizes.



Pattern #1



Pattern #2



Pattern #3

How many blocks of each kind will pattern # n need?

Which pattern has a total of 841 gray blocks?

How many white blocks has that pattern?

Explain your work and show your calculations.

Please continue your work on the page opposite.

Sidewalk Stones (continued)

▪